



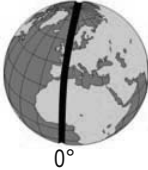
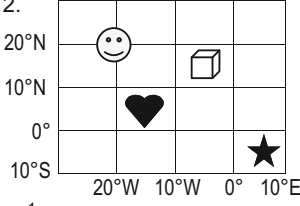


Name \_\_\_\_\_ Date \_\_\_\_\_

# U. S. History to 1865

# REVIEW #15

## HISTORY and GEOGRAPHY

## CIVICS and ECONOMICS

<b>M O N D A Y</b>	<p>1. Oops! What needs to be deleted from the chart?</p> <div><p><b>European Motivations for Exploration</b></p><ul style="list-style-type: none"><li>a. <b>Economic:</b> gold, natural resources, and trade</li><li>b. <b>Religious:</b> to spread the Christian faith</li><li>c. <b>Looking</b> for new medicines</li><li>d. <b>Desire</b> for power/superiority</li></ul></div> <p>US1.4a</p>	<p>2. The imaginary lines that run from pole to pole and measure distance from east or west of the prime meridian are—</p> <ul style="list-style-type: none"><li>a. parallels of latitude.</li><li>b. meridians of longitude.</li><li>c. parallels of longitude.</li><li>d. meridians of latitude.</li></ul>  <p>US1.1g</p>	<p>3. <b>CAUSE</b></p> <p>Great Britain wanted to stay a world power.</p> <p><b>RESULT</b></p> <p>?</p> <ul style="list-style-type: none"><li>a. The slave trade decreased.</li><li>b. They fought France during the French and Indian War.</li><li>c. More settlers were sent to the colonies.</li><li>d. The slave trade increased.</li></ul> <p>US1.6a</p>	<p>4. <b>Human Resources for Plantations</b></p> <div><div>Enslaved Africans/African Americans</div><div>?</div></div> <p>Which of the following was another source of labor found in the Southern region?</p> <ul style="list-style-type: none"><li>a. indentured servants</li><li>b. children</li><li>c. soldiers</li><li>d. illegal aliens</li></ul> <p>US1.5b</p>															
<b>T U E S D A Y</b>	<p>1. Which of the following is another name for Roanoke Island?</p> <ul style="list-style-type: none"><li>a. City of Brotherly Love</li><li>b. New World</li><li>c. King's Dominion</li><li>d. Lost Colony</li></ul> <p>US1.5a</p>	<p>2. </p> <p><sup>1</sup>Circle the symbol that is closest to the 5°W meridian of longitude.</p> <p><sup>2</sup>Trace in red the prime meridian.</p> <p>US1.1g</p>	<p>3. What was <b>not</b> a source of colonial dissatisfaction?</p> <ul style="list-style-type: none"><li>a. The colonies had no representation in Parliament and were taxed.</li><li>b. The Proclamation of 1763 limited western settlement.</li><li>c. The quality of the English goods had become bad.</li><li>d. Colonists resented the governors' power and control of their legislatures.</li></ul> <p>US1.6a</p>	<p>4. <sup>1</sup>When I think of colonial <b>craftsmen</b>, I have to think of the patriot _____. He was a silversmith in Boston who warned that "the British are coming!"</p> <p><sup>2</sup>What is another word for craftsman? _____</p> <p><sup>3</sup>What kind of resource were craftsmen? _____</p> <p>US1.5c, 6c</p>															
<b>W E D N E S D A Y</b>	<p>1. Number the colonies to show the order in which they were established.</p> <ul style="list-style-type: none"><li>_____ a. Georgia</li><li>_____ b. Plymouth</li><li>_____ c. Roanoke Island</li><li>_____ d. Jamestown</li></ul> <p>US1.5a, 1.1c</p>	<p>2. Put the events in time order to show how Africans became enslaved.</p> <ul style="list-style-type: none"><li>_____ a. shipped to the colonies</li><li>_____ b. sold to slave traders</li><li>_____ c. captured in their homeland of Africa</li><li>_____ d. sold into slavery</li></ul>  <p>US1.5c</p>	<p>3. Check (✓) all the reasons why Great Britain taxed the colonies.</p> <ul style="list-style-type: none"><li>_____ a. to establish public schools</li><li>_____ b. to pay for the French and Indian War</li><li>_____ c. to open up land in the west for settlement</li><li>_____ d. to pay for the cost of keeping British soldiers in the colonies</li></ul> <p>US1.6a</p>	<p>4. Complete the chart.</p> <p>NE=New England MA=Mid-Atlantic S=Southern</p> <table border="1"><thead><tr><th colspan="3">Colonial Interdependence</th></tr><tr><th>Goods or Service</th><th>Who Had Need of It</th><th>Colony That Supplied It</th></tr></thead><tbody><tr><td>A1 Food (grain)</td><td>A2 S NE</td><td>A3</td></tr><tr><td>B1 manufactured goods (tools, equipment)</td><td>B2</td><td>B3</td></tr><tr><td>C1</td><td>C2</td><td>C3 S</td></tr></tbody></table> <p>US1.5b</p>	Colonial Interdependence			Goods or Service	Who Had Need of It	Colony That Supplied It	A1 Food (grain)	A2 S NE	A3	B1 manufactured goods (tools, equipment)	B2	B3	C1	C2	C3 S
Colonial Interdependence																			
Goods or Service	Who Had Need of It	Colony That Supplied It																	
A1 Food (grain)	A2 S NE	A3																	
B1 manufactured goods (tools, equipment)	B2	B3																	
C1	C2	C3 S																	
<b>T H U R S D A Y</b>	<p>1. <sup>1</sup>From which of the following were the separatists looking to avoid religious *persecution?</p> <ul style="list-style-type: none"><li>a. Church of England</li><li>b. Roman Catholic Church</li><li>c. Debtor's prison</li><li>d. Quakers</li></ul> <p><sup>2</sup>Which colony did they settle?</p> <p>_____</p> <p>*suffering caused by a belief</p> <p>US1.5a</p>	<p>2. As the ship set sail, Sam took a last look at the shores of Great Britain. He thought, "I hope the man who paid for my passage is a kind person. I know the work on the plantation will be hard. But when my contract is up in seven years, I will be free with a chance for a better life than the one I have here."</p> <p>In which colonial region was Sam most likely going to live and work?</p> <p>_____</p> <p>US1.5b</p>	<p>3. Under colonial laws, the children of enslaved African Americans were—</p> <ul style="list-style-type: none"><li>a. free after the age of 18.</li><li>b. allowed to vote.</li><li>c. born into slavery.</li><li>d. free at birth.</li></ul>  <p>US1.5c</p>	<p>4. Which of the following is an example of how Great Britain enforced economic control over the colonies?</p> <ul style="list-style-type: none"><li>a. Everyone had to drink tea.</li><li>b. The colonies traded raw materials for goods.</li><li>c. Everyone had to speak English.</li><li>d. Only the members of the Church of England could vote.</li></ul> <p>US1.5d</p>															

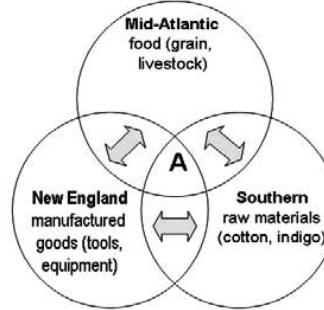


Name \_\_\_\_\_ Date \_\_\_\_\_

## U.S. History to 1865 QUIZ #15

1. Which of the following belongs in Section A?

- a. independent
- b. agricultural
- c. interdependent
- d. manufacturing



2. Which of the following could **most likely** be added to the personal profile of the fictitious Thomas Jones?

- a. owner of enslaved African Americans
- b. separatist wishing to avoid persecution
- c. religious follower of the Church of England
- d. prisoner, just released from debtor's prison



### Personal Profile

Name: Thomas Jones

Age: not known

Occupation: toolmaker

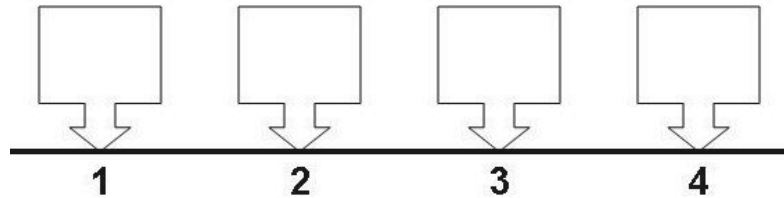
Education: can read and write

Residence: Plymouth Colony

Other: ?

3. Which colony belongs in Box 2 on the time line?

- a. Lost Colony
- b. Massachusetts Bay Colony
- c. Georgia
- d. Jamestown



4. Give two reasons that many colonists became dissatisfied with Great Britain.

- 1 \_\_\_\_\_
- 2 \_\_\_\_\_

5. Which two capitals are south of Virginia and are located along the same meridian of longitude?

- a. Sacramento, Denver
- b. Atlanta, Tallahassee
- c. Harrisburg, Richmond
- d. Oklahoma City, Columbia

