



Name _____ Date _____

VIRGINIA STUDIES





QUIZ #23

1. Amy's teacher had the students make posters to show the major products and industries of Virginia's five regions. The students could choose whichever region they wanted. Which region did Amy choose for her poster?

- a. Coastal Plain (Tidewater)
- b. Appalachian Plateau
- c. Valley and Ridge
- d. Blue Ridge Mountains

EXAMPLE PRODUCTS AND INDUSTRIES

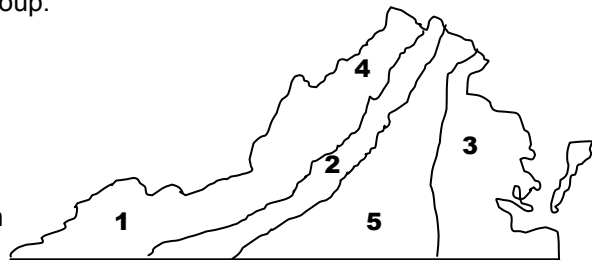
PRODUCTS:

INDUSTRY: farming

2. ¹Use the numbers on the map to show where each cultural group primarily settled. Numbers can be used more than once. More than one number can be used for each group.

- _____ a. Scots-Irish
- _____ b. Germans
- _____ c. African Americans
- _____ d. English, other Europeans



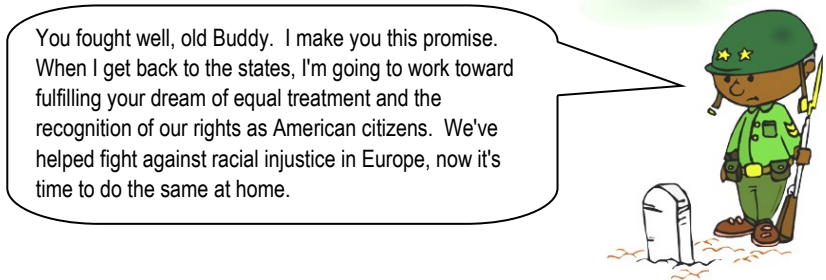
²Before the arrival of the Jamestown settlers, American Indians lived in these regions: _____

3. Match.

- | | |
|------------------------------|---------------------------------|
| _____ a. Oliver W. Hill, Sr. | 1. Father of the Constitution |
| _____ b. James Madison | 2. bank president |
| _____ c. Harry F. Byrd, Sr. | 3. civil rights leader |
| _____ d. Maggie L. Walker | 4. the "Pay As You Go" governor |

4. Which of the following does the cartoon BEST illustrate?

- a. reasons why Massive Resistance failed
- b. beginnings of the Civil Rights Movement
- c. the end of Reconstruction
- d. the cause of the Civil War



5. Sequence the events on the time line by writing **a, b, c, d** and **e** in the correct boxes.

- a. World War II
 - b. *Brown vs. Board of Education*
 - c. Jim Crow Laws
 - d. Massive Resistance
 - e. Reconstruction

