



Name \_\_\_\_\_ Date \_\_\_\_\_










# SOCIAL STUDIES DAILY REVIEW #3

## HISTORY

## GEOGRAPHY

## CIVICS

## ECONOMICS

<p><b>M O N D A Y</b></p>	<p>1. Which caption belongs with this picture?</p> <p>a. The Pyramids of Egypt b. White House Wonders c. The Great Wall of China d. The Washington Monument</p> 	<p>2. Fill in the blank.</p> <p>a. Maps show a view from _____. (above, below)</p> <p>b. Maps are _____. (flat, round)</p> <p>c. Maps show things and objects as they are, only _____. (smaller, larger)</p> <p>d. Map sizes are _____. (the same, different)</p>	<p>3. Boy, was I upset! The teacher took away our recess for not showing respect for the rights of others. I now know we were wrong to—</p> <p>a. talk in the hallway. b. share our crayons. c. return lost money. d. put up our supplies.</p>	<p>4. Builders and farmers are two examples of people who make or grow things to sell. Which word BEST describes people like them?</p> <p>a. consumers b. volunteers c. producers d. citizens</p>										
<p><b>T U E S D A Y</b></p>	<p>1. Something that happens to make things different is called a—</p> <p>a. tool. b. museum. c. problem. d. change.</p>	<p>2. Which map symbol usually stands for a capital city?</p> <p>a.  c. </p> <p>b.  d. </p>	<p>3. Name the months in which these holidays are celebrated.</p> <p>a. Independence Day _____</p> <p>b. Memorial Day _____</p> <p>c. Columbus Day _____</p> <p>d. Presidents' Day _____</p>	<p>4. Use the words GOODS, NEEDS, MONEY, or WANTS on the line after each definition.</p> <p>a. food, clothes, house _____</p> <p>b. things you would like to have _____</p> <p>c. things made or grown _____</p> <p>d. used to buy things _____</p>										
<p><b>W E D N E S D A Y</b></p>	<p>1. What ancient civilization invented the 365-day calendar?</p> <p>a. Ancient Greece b. Ancient China c. Ancient Mali d. Ancient Egypt</p> 	<p>2. Complete the chart.</p> <table border="1" data-bbox="524 1247 821 1535"> <thead> <tr> <th colspan="2">Cardinal Directions</th> </tr> </thead> <tbody> <tr> <td>•</td> <td>_____</td> </tr> <tr> <td>•</td> <td>_____</td> </tr> <tr> <td>•</td> <td>_____</td> </tr> <tr> <td>•</td> <td>_____</td> </tr> </tbody> </table>	Cardinal Directions		•	_____	•	_____	•	_____	•	_____	<p>3. Jack's mom warned him over and over to look both ways before crossing the street. Well, he didn't. As you can see, he was hurt. This was his _____ for breaking the rule.</p> <p>a. reward b. punishment c. observation d. consequence</p> 	<p>4. Ungar had made a shell necklace, but he needed a new spear for fishing. He lived in a time before there was money. How did he MOST LIKELY get the spear?</p> <p>a. bartered with a spear maker b. shopped wisely c. rented a spear d. went hunting</p> 
Cardinal Directions														
•	_____													
•	_____													
•	_____													
•	_____													
<p><b>T H U R S D A Y</b></p>	<p>1. <sup>1</sup>Who was the girl who visited the settlers in Jamestown and helped them receive food from the Indians?</p> <p>_____</p> <p><sup>2</sup>Who was her father, the chief of many tribes?</p> <p>_____</p> 	<p>2. Our teacher told us to sort lots of pictures of ancient Greece, Rome, and Mali by their <b>different traits</b>. Which of the following did we look for in the pictures?</p> <p>a. famous people b. the age of the pictures c. characteristics d. map locations</p>	<p>3. It is time to vote on a class decision. When you raise your hand to vote, you are—</p> <p>a. a popular person. b. a responsible citizen. c. an observer. d. asking a question.</p>	<p>4. Riddle: When people cannot get all they want or need at the same time, they blame me for the limited resources, goods, and services. They call me—</p> <p>a. debt. b. bartering. c. conservation. d. scarcity.</p>										