



Name \_\_\_\_\_ Date \_\_\_\_\_




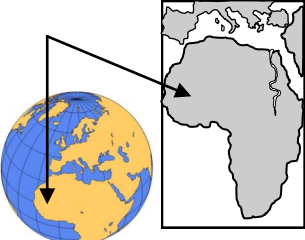
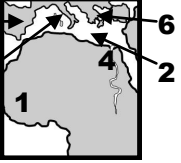


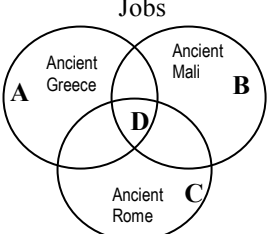
# SOCIAL STUDIES DAILY REVIEW #23

## HISTORY

## GEOGRAPHY

## CIVICS

## ECONOMICS

<p><b>M O N D A Y</b></p> <p>1. Jamal says that one of the largest and richest ancient African empires was Liberia. Shantaya says that it was Mali. Who is right, Jamal or Shantaya?</p> <p>_____</p> 	<p>2. Match the American Indians to the type of land on which they lived.</p> <p>__a. Pueblo      1. plains, prairies, rolling hills</p> <p>__b. Lakota      2. high flatlands</p> <p>__c. Powhatan   3. rivers, hills, mountains, coastland</p>	<p>3. Who were the rulers in ancient Mali?</p>  <p>a. representatives b. kings c. storytellers d. presidents</p>	<p>4. What did the rich and powerful rulers of Mali control?</p> <p>a. trade b. oil c. big game hunting d. drum beats</p>
<p><b>T U E S D A Y</b></p> <p>1. How was the history and traditions of Mali passed down from one generation to the next?</p> <p>a. by kings b. in books c. by laws d. by their storytellers</p> 	<p>2. Ancient Mali was located in a region called _____.</p> 	<p>3. America is a republic. That means we vote for and elect _____ to run our government and make laws.</p> <p>a. judges b. members c. policemen d. representatives</p>	<p>4. What did the people of Ancient Mali use for their health and to keep foods from spoiling?</p> <p>a. sand b. snake oil c. salt d. water</p> <p>Where in Africa was this natural resource?</p> <p>_____</p>
<p><b>W E D N E S D A Y</b></p> <p>1. Fill in the blanks.</p> <div style="border: 1px solid black; padding: 5px; width: fit-content;"> <p>Eleanor Roosevelt (ER) Helen Keller (HK) Betsy Ross (BR)</p> </div> <p>a. _____ was known as a leader for equal rights for all people.</p> <p>b. _____ sewed the first American flag.</p> <p>c. _____ worked to help others who were blind.</p>	<p>2. </p> <p>Where is it on the map?</p> <p>___a. Egypt ___b. Spain ___c. Mediterranean Sea ___d. Mali ___e. Greece ___f. Rome</p>	<p>3. The students in my class are European, Asian, and African. Because we are all Americans, we are able to attend the same school. This is an example of—</p> <p>a. states rights. b. women's rights. c. equality under the law. d. ancestor rights.</p>	<p>4. Ancient Mali became wealthy by trading salt for gold. This is an example of people in the past _____ for their needs and wants.</p> <p>a. borrowing b. farming c. giving money d. bartering</p> 
<p><b>T H U R S D A Y</b></p> <p>1. Which Mexican American helped improve conditions for the farm workers?</p> <p>a. Jose Ortiz b. Raul Alvarez c. Angelo Diaz d. César Chávez</p>	<p>2. Mali's great trading city with a library full of Greek and Roman books was—</p> <p>a. Tuscany. b. Thailand. c. Timbuktu. d. Tasmania.</p> 	<p>3. Choose <b>a</b> or <b>b</b> to complete the sentence.</p> <p>If citizens elect a few people to make laws for them, it is a <sup>(1)</sup> _____.</p> <p>If all citizens vote to make laws, it is a <sup>(2)</sup> _____.</p> <p>a. direct democracy b. representative democracy</p>	<p>4. Which job belongs in section D of the Venn diagram?</p>  <p>a. trader      c. steel worker b. fireman     d. hunter</p>