



Name _____ Date _____




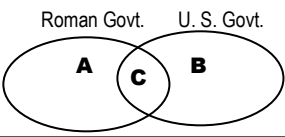




SOCIAL STUDIES DAILY REVIEW #22

HISTORY

GEOGRAPHY

CIVICS

ECONOMICS

<p>M O N D A Y</p> <p>1. ¹What is the name of this building? a. Athena's Temple b. Agora Palazzo c. Pandora's Box d. Parthenon</p> <p>² In what country is it located?</p> 	<p>2. Is it land or is it water on the map? You can usually tell which it is by its— a. smell. b. sound. c. texture. d. color.</p>	<p>3. The pledge to the American flag is the— a. Allegiance to the Republic. b. Promise of Allegiance. c. Pledge of Allegiance. d. American Allegiance.</p> <p>Discuss: What is allegiance?</p>	<p>4. Why must people make economic choices? a. Resources, goods, and services are limited, or scarce. b. to avoid boredom c. The government makes them. d. Hard decisions make you smarter.</p>
<p>T U E S D A Y</p> <p>1. What is this?  a. an aqueduct b. a causeway c. a tunnel d. a railroad bridge You can tell by its arches that _____ built it.</p>	<p>2. Which ancient civilizations used irrigation to water their crops?  a. Spain, England b. Rome, Greece c. China, Egypt d. China, Greece</p>	<p>3. What belongs BEST in Section C of the Venn diagram?  a. a president as leader b. only a few people vote c. republic d. direct democracy</p>	<p>4. Octavius was on his way to Rome to find a job. Which job did he most likely NOT see on the list?</p>  <p>HELP WANTED road builders farmers miners traders APPLY IN ROME</p>
<p>W E D N E S D A Y</p> <p>1. ¹What is the name of this building? a. Caladium b. Colossus c. Colosseum d. Corinthian</p>  <p>²Where is it? _____</p>	<p>2. Because of the many mountains in Greece, there were— a. a lot of mountain goats. b. small, independent cities. c. many roads. d. winter ski resorts.</p>	<p>3. Greece had a form of government called a— a. representative democracy. b. interdependent democracy. c. specialization democracy. d. direct democracy.</p>	<p>4. Octavius got a job building an aqueduct. Water flowed through the aqueduct to water the crops. The crops were traded for other things. What kind of resource was Octavius? _____ What was the natural resource? _____</p>
<p>T H U R S D A Y</p> <p>1. Greek and Roman architecture is characterized by the _____ used on their buildings. a. vinyl siding b. paint c. sculpture d. scars</p> 	<p>2. Match. _____a. James River. _____b. Rio Grande River. _____c. Mississippi River. _____d. Great Lakes.</p> 	<p>3. What kind of government did Rome have? a. colossal democracy b. direct democracy c. interdependent democracy d. representative democracy</p>	<p>4. Did these ancient workers provide services or goods? Write S for service or G for goods. _____a. farmers _____b. shipbuilders _____c. traders _____d. road builders</p>