





Name _____ Date _____

SOCIAL STUDIES DAILY REVIEW QUIZ #22

1. Based on designs of architecture, which ancient civilization does each of the following pictures represent?



a. _____ b. _____ c. _____ d. _____ e. _____

2. If you had lived in Greece, you would have gone to vote on every law or rule that was decided. This is because the government in Greece was a—

- a. people's democracy.
- b. representative democracy.
- c. direct democracy.
- d. special democracy.

3.

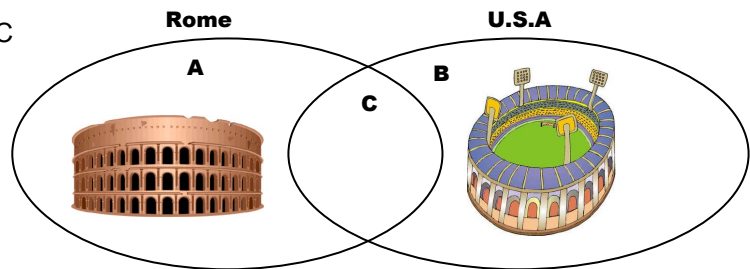
Well, Octavius, I bet you didn't know what a difficult job it is to build these roads!



Our roads are the best! But there are days when I wish I didn't live in _____.

4. Which characteristic of architecture from past civilizations belongs BEST in Section C of the Venn diagram?

- a. columns
- b. openings
- c. NFL player
- d. arches



5. Which number on the map shows the location of the—

- _____ a. Rio Grande River?
- _____ b. Mississippi River?
- _____ c. James River?
- _____ d. Great Lakes?

