

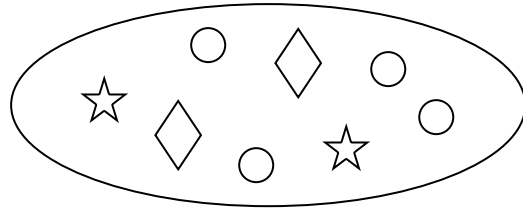
NAME _____

DATE _____

MATH REVIEW QUIZ #9

1. What fraction of the set are circles?


- A. $\frac{1}{2}$
- B. $\frac{3}{8}$
- C. $\frac{8}{4}$
- D. $\frac{1}{8}$



OA OB OC OD

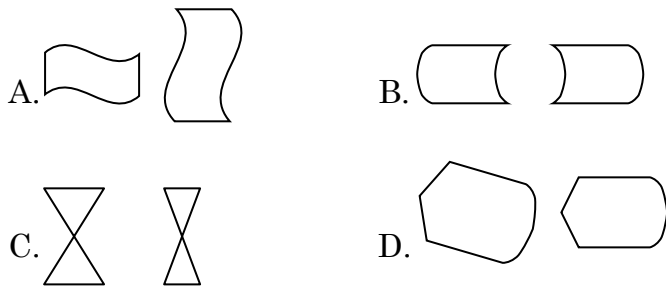
2. Katie feeds Sassy three cups of oats every day. How many cups of oats does Sassy get in one week?

- F. 15
- G. 18
- H. 21
- I. 12




OF OG OH OJ

3. Which pair of objects are congruent?

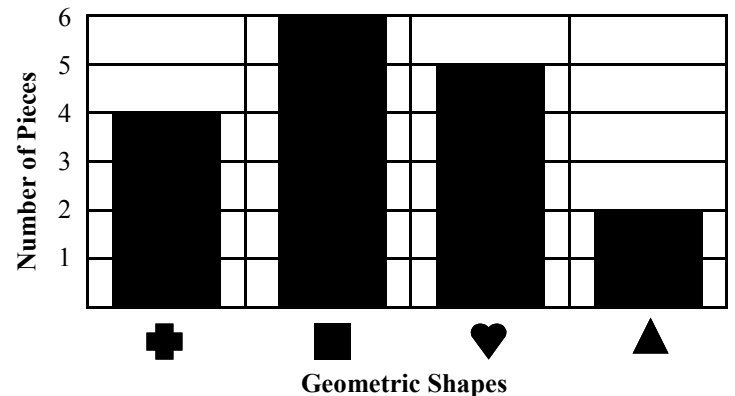


OA OB OC OD

4. Eric used the information in the box to create a bar graph of the game pieces he found in the attic. He made a mistake when he made one of the bars. Which bar is incorrect?



Game Pieces

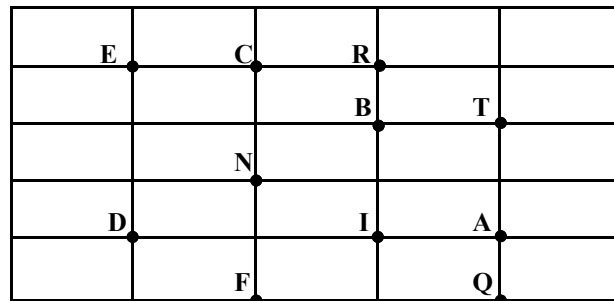


Geometric Shapes

OF OG OH OJ

5. Which set of line segments can be connected to make the letter L?

- A. \overline{CF} , \overline{NR}
- B. \overline{TN} , \overline{CA}
- C. \overline{RI} , \overline{IA}
- D. \overline{NA} , \overline{TI}



OA OB OC OD

- F. ♥
- G. ■
- H. ✚
- J. ▲