

NAME _____

DATE _____

DAILY MATH REVIEW #9B

COMPUTATION AND ESTIMATION

NUMBER AND NUMBER SENSE

MEASUREMENT AND GEOMETRY

PROBABILITY AND STATISTICS PATTERNS, FUNCTIONS, AND ALGEBRA

W
E
D
N
E
S
D
A
Y

1. Ricardo made an error. In which place did he make his mistake?

$$\begin{array}{r} 9,446 \\ - 7,527 \\ \hline 1,819 \end{array}$$

- A. tens
B. ones
C. hundreds
D. thousands

OA OB OC OD

2. Color $\frac{1}{4}$ of the flowers red.




How many did you color?

- F. 4
G. 1
H. 2
J. 6

OF OG OH OJ

3. How many minutes are there in $1\frac{1}{2}$ hours?




- A. 10
B. 90
C. 60
D. 30

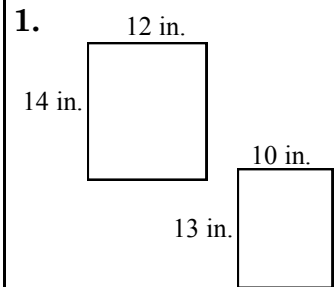
OA OB OC OD

4. When Ronald was four years old, he was thirty-six inches tall. He has grown three inches every year since then. How tall is Ronald now?

- F. 48 inches
G. 42 inches
H. 39 inches
J. 45 inches



OF OG OH OJ

T
H
U
R
S
D
A
Y

What is the difference in the perimeters of these two shapes?

- F. 6 in. H. 14 in.
G. 16 in. J. 98 in.

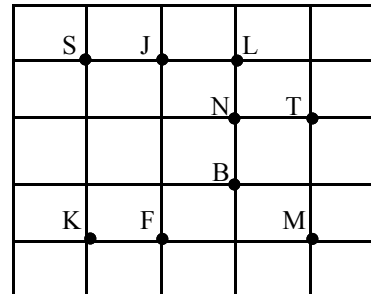
OF OG OH OJ

2. Which set of numbers is in order from least to greatest?

- A. 2,564 3,584 3,559
B. 1,285 999 4,001
C. 7,381 6,987 7,898
D. 5,984 5,996 6,523

OA OB OC OD

3. Connect \overline{JF} and \overline{FM} . What letter did you make?



- F. I H. T
G. K J. L

OF OG OH OJ

4. Which symbol should Max type in order to make this statement true?

$$4 + 5 \square 3 + 8$$

- A. <
B. >
C. =
D. -



OA OB OC OD