



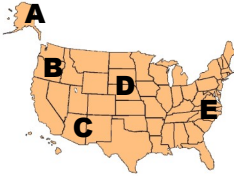





Name _____ Date _____

U. S. History to 1865 REVIEW #3

HISTORY and GEOGRAPHY

CIVICS and ECONOMICS

<p>M O N D A Y</p> <p>1. Match the American Indians to their homes.</p>  <p>1</p>  <p>2</p> <p>_____ a. Pueblo _____ b. Iroquois</p> <p style="text-align: right;"><small>2.4, US1.3c</small></p>	<p>2. </p> <p>The Lakota people lived in the region of North America known as the grasslands. Which letter on the map gives the location of this area? _____</p> <p style="text-align: right;"><small>US1.3b</small></p>	<p>3. Which document was written to proclaim our independence from England?</p> <p>a. The Declaration of Independence b. The Constitution c. The Mayflower Compact d. The Magna Carta</p> <p>Who wrote it? _____</p> <p style="text-align: right;"><small>3.11, US1.6b</small></p>	<p>4. Because the European demand for tobacco was high, the Jamestown settlers grew tobacco. What is it called when people focus on making one or just a few certain goods?</p> <p>a. scarcity b. economics c. opportunity cost d. specialization</p>  <p style="text-align: right;"><small>US1.5b</small></p>						
<p>T U E S D A Y</p> <p>1. Why did the Lakota use animal skins to make shelters instead of lumber from trees?</p> <p>a. Trees were too expensive. b. The land they inhabited had very few trees. c. Animal skins kept out insects better than wood. d. They believed in "waste not, want not," so used all parts of the animals they killed.</p> <p style="text-align: right;"><small>2.4, US1.3c</small></p>	<p>2. Use the above map. Which group of Native Americans inhabited area B?</p> <p>a. Pueblo b. Kwakiutl c. Iroquois d. Lakota</p> <p>This area is characterized by a _____ (rainy, dry) _____ (mild, hot) climate.</p> <p style="text-align: right;"><small>US1.3b</small></p>	<p>3. Our Founding Fathers were wise men. Because they knew that over time changes to the Constitution would be needed, they set up a way to change it. What are changes to the Constitution called?</p> <p>a. alternatives b. statements c. entitlements d. amendments</p> <p style="text-align: right;"><small>US1.7b, understanding vocabulary</small></p>	<p>4. What is a person called who uses money to purchase goods or services?</p> <p>a. settler b. cashier c. consumer d. banker</p> <p style="text-align: right;"><small>2.9</small></p>						
<p>W E D N E S D A Y</p> <p>1. </p> <p>Running Bear is hunting deer in the forest. To which tribe does he most likely belong?</p> <p>a. Inuit c. Lakota b. Iroquois d. Pueblo</p> <p style="text-align: right;"><small>2.2, US1.3c</small></p>	<p>2. Where did the Iroquois live?</p> <p>a. Southwest b. Pacific Northwest coast c. Eastern Woodland, northeast North America d. Arctic areas, present-day Alaska and northern Canada</p> <p style="text-align: right;"><small>US1.3b</small></p>	<p>3. What are the first ten amendments of the constitution called?</p> <p>a. The Declaration of Independence b. The Virginia Statute of Religious Freedom c. The Bill of Rights d. The U.S. Document of Rights</p> <p style="text-align: right;"><small>US1.7b</small></p>	<p>4. <table border="1" style="margin-left: auto; margin-right: auto;"> <tr> <th colspan="3">KINDS OF RESOURCES</th> </tr> <tr> <td style="text-align: center;">?</td> <td style="text-align: center;">?</td> <td style="text-align: center;">?</td> </tr> </table></p> <p>Which of the following would complete the chart?</p> <p>a. gold, oil, silver b. money, barter, credit c. natural, human, capital d. legislative, executive, judicial</p> <p style="text-align: right;"><small>2.7, US1.3c</small></p>	KINDS OF RESOURCES			?	?	?
KINDS OF RESOURCES									
?	?	?							
<p>T H U R S D A Y</p> <p>1. ¹Which American Indians were horsemen?</p> <p>a. Lakota b. Powhatan c. Inuit d. Iroquois</p>  <p>²In what kind of house did they live? _____</p> <p style="text-align: right;"><small>2.2</small></p>	<p>2. Look at the map above in Monday's row.</p> <p>¹Which American Indians inhabited area A ? _____</p> <p>²Which tribes inhabited present-day New Mexico and Arizona? _____</p> <p style="text-align: right;"><small>US1.3b</small></p>	<p>3. Which of the following is an example of why we have government?</p> <p>a. My dad lost his job and needs a new one. b. The grocery store near us burned down and must be rebuilt. c. We need to lower highway speeds. d. Many people work with computers but can't afford to own one.</p> <p style="text-align: right;"><small>3.10</small></p>	<p>4. <table border="1" style="margin-left: auto; margin-right: auto;"> <tr> <td style="padding: 5px;">CAUSE Resources are limited.</td> <td style="font-size: 2em; vertical-align: middle;">→</td> <td style="padding: 5px;">EFFECT People cannot get what they want or need.</td> </tr> </table></p> <p>Which economic term can replace the words in the CAUSE box?</p> <p>a. bartering b. specialization c. purchasing d. scarcity</p> <p style="text-align: right;"><small>2.9</small></p>	CAUSE Resources are limited.	→	EFFECT People cannot get what they want or need.			
CAUSE Resources are limited.	→	EFFECT People cannot get what they want or need.							