

NAME _____

DATE _____

DAILY MATH REVIEW #9B

NUMBER AND OPERATIONS

MEASUREMENT AND GEOMETRY

PROBABILITY AND STATISTICS PATTERNS, FUNCTIONS, AND ALGEBRA

W
E
D
N
E
S
D
A
Y

1. Ricardo made an error. In which place did he make his mistake?

$$\begin{array}{r} 9,446 \\ - 7,527 \\ \hline 1,819 \end{array}$$

- A. tens
- B. ones
- C. hundreds
- D. thousands


OA OB OC OD

2. Color $\frac{1}{4}$ of the flowers red.



How many did you color?

3. How many minutes are there in $1\frac{1}{2}$ hours?




- A. 10
- B. 90
- C. 60
- D. 30

OA OB OC OD

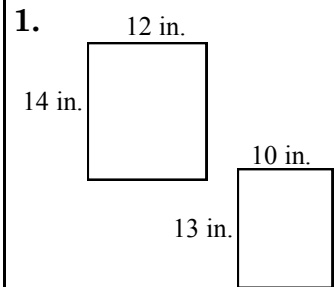
4. When Ronald was four years old, he was thirty-six inches tall. He has grown three inches every year since then. How tall is Ronald now?

- F. 48 inches
- G. 42 inches
- H. 39 inches
- J. 45 inches



OF OG OH OJ

T
H
U
R
S
D
A
Y



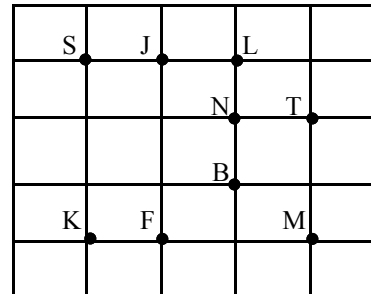
What is the difference in the perimeters of these two shapes?

2. Which set of numbers is in order from least to greatest?

- A. 2,564 3,584 3,559
- B. 1,285 999 4,001
- C. 7,381 6,987 7,898
- D. 5,984 5,996 6,523

OA OB OC OD

3. Connect \overline{JF} and \overline{FM} . What letter did you make?



- F. I
- G. K
- H. T
- J. L

OF OG OH OJ

4. Which symbol should Max type in order to make this statement true?

$$4 + 5 \square 3 + 8$$

- A. <
- B. >
- C. =
- D. -



OA OB OC OD