

NUMBER AND OPERATIONS

MEASUREMENT AND GEOMETRY

PROBABILITY AND STATISTICS
PATTERNS, FUNCTIONS, AND ALGEBRA

MONDAY

1. Jake has this much money.



If he spends \$1.88, how much will he have left? Show your work.

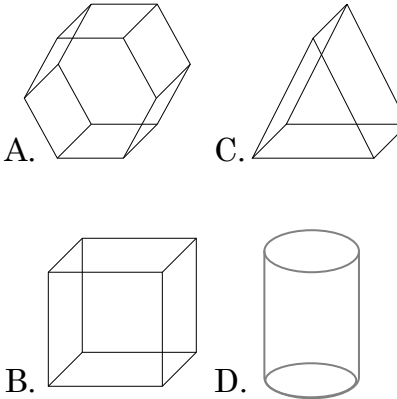
2. Use your calculator to find the sum.

$$1,362 + 2,787 = ?$$

- F. 3,149
- G. 4,049
- H. 4,149
- J. 3,025

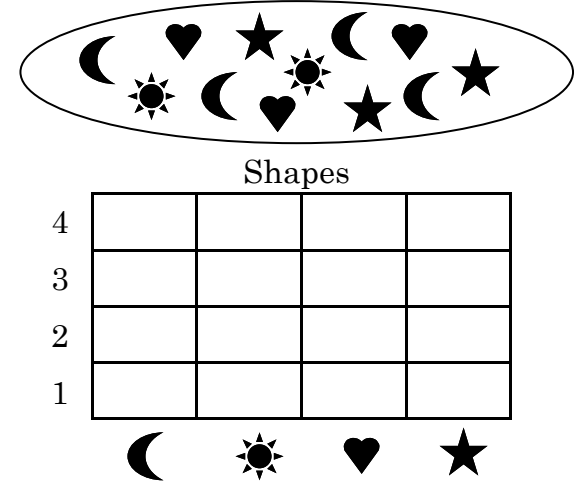
OF OG OH OJ

3. Which figure is a cylinder?



OA OB OC OD

4. Use the data in the circle to complete the bar graph.



TUESDAY

1. Sarah made seven baskets in last night's game. Each basket was worth two points. How many points did Sarah make in all?

- F. 10
- G. 7
- H. 14
- J. 12



2. Is the ♣ the 5th symbol from the top or from the bottom?



OF OG OH OJ

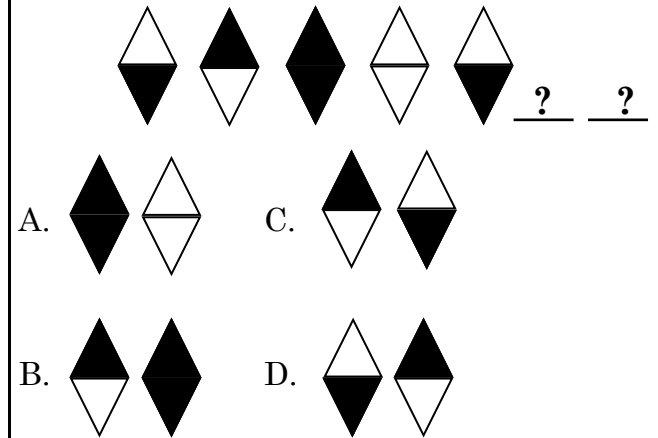
3. Which math term BEST describes the zebras?



- F. polygon
- G. angles
- H. edges
- J. congruent

OF OG OH OJ

4. Which shapes come next in the pattern?



OA OB OC OD