

State Shell
Oyster









Name _____ Date _____

VIRGINIA STUDIES DAILY REVIEW #19

HISTORY and GEOGRAPHY

CIVICS and ECONOMICS

M O N D A Y	<p>1. "I have only a few rights, so I want to protect them. I think the best way to do this is to help the Confederacy." Who would have said this?</p> <p>a. an American Indian b. an enslaved African American c. a white Virginian d. a free African American</p> <p>VS.7c</p>	<p>2.  Which is the BEST term to describe the relative location of West Virginia to Virginia?</p> <p>a. to the northeast of b. bordering or next to c. behind d. to the side of</p> <p>K.3, VS.2a</p>	<p>3. Number the capital cities of Virginia so that they are in order from the earliest to the present.</p> <p>_____ a. Williamsburg _____ b. Richmond _____ c. Jamestown</p> <p>VS.1f</p>	<p>4. How did the discovery of a mineral in Tazewell County affect Virginia's economy?</p> <p>a. Tobacco farming stopped. b. Coal became Virginia's primary source of wealth. c. Industries began making tobacco products. d. The coal mining industry helped that region grow.</p>  <p>VS.8c</p>														
T U E S D A Y	<p>1. When were these events? Write R for colonial or Revolutionary War times, and C for the Civil War and Reconstruction eras.</p> <p>_____ a. surrender at Yorktown _____ b. surrender at Appomattox _____ c. sharecropping _____ d. House of Burgesses _____ e. Richmond was burned _____ f. freed slaves made gains in government</p> <p>VS.5c, 7b, 8a, 3d, 8b</p>	<p>2.  My name is Brightwater. I just got back from visiting the strangers who came to our land in very big boats. I did not understand their language. They did not speak Algonquian. In what region of Virginia does Brightwater live?</p> <p>VS.2g</p>	<p>3. <table border="1" data-bbox="857 772 1125 919"> <tr> <td style="text-align: center;">?</td> <td style="text-align: center;">?</td> </tr> <tr> <td style="text-align: center;">PARLIAMENT Authority belongs to Parliament</td> <td style="text-align: center;">COLONISTS Authority belongs to local assemblies</td> </tr> </table> Which is the BEST title?</p> <p>a. Conflict in the 1700s b. 1st Disagreement Between Virginia and West Virginia c. A Reason for Secession d. Constitutional Compromise</p> <p>VS.5a</p>	?	?	PARLIAMENT Authority belongs to Parliament	COLONISTS Authority belongs to local assemblies	<p>4. Which item does NOT belong on the chart? _____</p> <table border="1" data-bbox="1149 846 1464 1056"> <tr> <th colspan="2">ITEMS NEEDED BY VIRGINIANS FOLLOWING THE CIVIL WAR</th> </tr> <tr> <td>a. medical care</td> <td>e. jobs</td> </tr> <tr> <td>b. bridges</td> <td>f. food</td> </tr> <tr> <td>c. clothes</td> <td>g. roads</td> </tr> <tr> <td>d. cars</td> <td>h. education</td> </tr> </table> <p>VS.8a,8c</p>	ITEMS NEEDED BY VIRGINIANS FOLLOWING THE CIVIL WAR		a. medical care	e. jobs	b. bridges	f. food	c. clothes	g. roads	d. cars	h. education
?	?																	
PARLIAMENT Authority belongs to Parliament	COLONISTS Authority belongs to local assemblies																	
ITEMS NEEDED BY VIRGINIANS FOLLOWING THE CIVIL WAR																		
a. medical care	e. jobs																	
b. bridges	f. food																	
c. clothes	g. roads																	
d. cars	h. education																	
W E D N E S D A Y	<p>1. Which of the following happened at Fredericksburg during the Civil War?</p> <p>a. The South lost the war. b. The battle was won by the Confederate troops that were led by Robert E. Lee. c. Ulysses S. Grant defeated the Confederacy. d. The Monitor and Merrimack fought a naval battle to a draw.</p> <p>VS.7b</p>	<p>2.  My chief named me "Mona-can." He calls on me when someone asks, "Who can do it?" But try as hard as I can, I can't understand the strangers who just moved into our land of rolling hills. They don't speak Siouan. Where do I live?</p> <p>VS.2g</p>	<p>3. "My brother and I were so thirsty this afternoon! Our water fountain in the park wasn't working, but the policeman wouldn't let us drink from the water fountain for whites." Which of the following does this example of a Jim Crow law illustrate?</p> <p>a. discrimination b. activation c. desegregation d. migration</p> <p>VS.8b</p>	<p>4. As business, agriculture, and industry grew after the Civil War and Reconstruction, small towns became cities. Which of the following made this growth possible?</p> <p>a. TV (communications) b. education (colleges) c. computers (technology) d. railroads (transportation)</p> <p>VS.8c</p>														
T H U R S D A Y	<p>1. Sequence these events.</p> <p>_____ a. Jim Crow Laws _____ b. Civil War _____ c. Reconstruction Era _____ d. Revolutionary War</p> <p>VS.1f</p>	<p>2. L'il Iro Quoi came home one day after a long day of hunting. He told his sister, Cher 'o Kee, that he had killed a big black bear in the woods near the border of what is now called North Carolina. He enjoyed telling her about his adventure. He spoke—</p> <p>a. English. b. Iroquoian. c. Siouan. d. Algonquian.</p>  <p>VS.2a</p>	<p>3. Grandpa said I must always exercise my right to vote when I grow up. He remembers when it was very difficult for African Americans to vote or hold public office because of unfair—</p> <p>a. age limits. b. blood tests. c. school tests. d. poll taxes and voting tests.</p>  <p>VS.8b</p>	<p>4. PROBLEM: During Reconstruction, southern landowners no longer had enslaved African Americans to work their land, and they did not have money to pay farm workers. What came about that helped solve this problem?</p> <p>a. Jim Crow Laws b. railroads c. sharecropping d. new industries</p> <p>VS.8a</p>														



Name _____ Date _____

VIRGINIA STUDIES

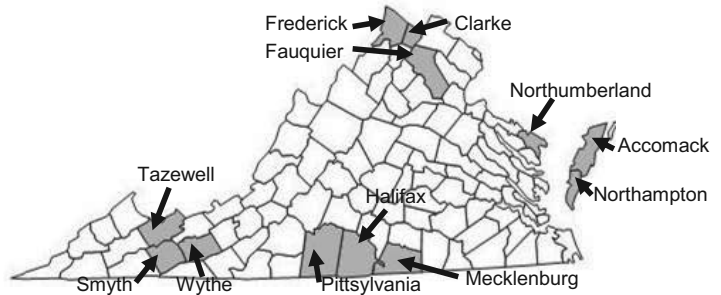
QUIZ #19

1. Use the map to answer the following questions.

¹One of the gray areas on the map is the county where coal was discovered after the Civil War and Reconstruction. Which county is it?

²Which county is "bordering" or "next to" it?

³Which county is "near" it? _____



2. Thomas and Fred were working hard to bring in the harvest. They grumbled about having to pay the landowner part of their profit. Fred said, "We'll never make enough money to own our own land."

Thomas and Fred are most likely—

- a. abolitionists.
- b. coal miners.
- c. sharecroppers.
- d. railroad workers.

3. Sequence these events by writing the letters in the correct boxes on the time line.

- A. Reconstruction Era B. Jim Crow Laws C. Civil War D. Revolutionary War



4. In which language group do these American Indians belong?

- Word Bank
- 1. Iroquoian
 - 2. Siouan
 - 3. Algonquian



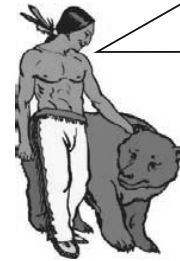
I am Littlefoot. I live west of the Fall Line. My village is in an area of rolling hills on the land at the foot of the mountains.

a.



I am Strongarm. I live east of the Fall Line in Werowocomoco, Powhatan's headquarters. We were first to have contact with the English.

b.



I am Sofheart and am Cherokee. My friend Bear and I live in southern Virginia near North Carolina. We sometimes come in contact with people from Southwest Virginia. They also speak my language.

c.

5. ¹Because racial _____ is illegal today, people of all races and religions are allowed to use the same public facilities, such as drinking fountains, restrooms, and restaurants.

(integration, migration, discrimination, desegregation)

²Why were poll taxes and voting tests made illegal?

- a. to make it possible for women to vote and run for office
- b. to make it difficult for African Americans and other minorities to vote
- c. so everyone's opportunity to vote is the same
- d. to make it possible for wise decisions when voting